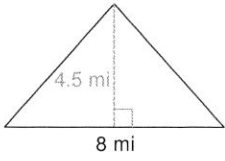


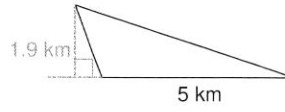
Area of Triangles

Find the area of each.

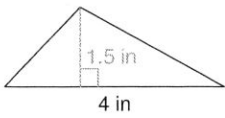
1)



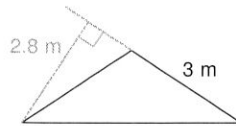
2)



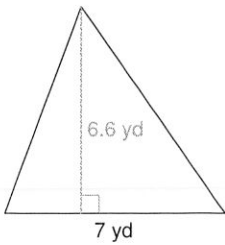
3)



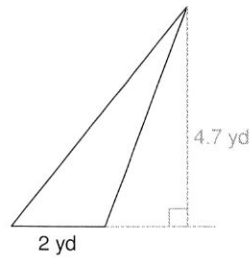
4)



5)



6)



Area of Squares, Rectangles, and Parallelograms

Find the area of each.

