

Name : _____

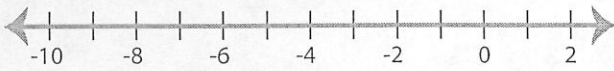
Score : _____

Graphing Inequalities

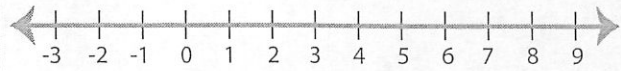
MS3

Graph the inequality: *And choose 4 to write a context for*

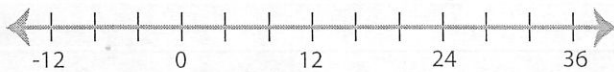
1) $x \leq -7$




2) $x \leq 5$



3) $x > 16$




4) $x \geq 10$



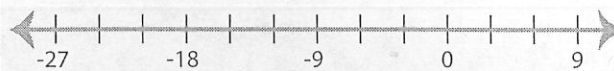
5) $x \leq -5$



6) $x < -10$




7) $x \geq -12$




8) $x > 22$




9) $x < 15$



10) $x \geq 20$



11) $x > 3$



12) $x \geq -14$

