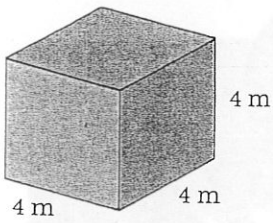
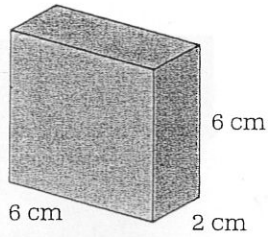


**Practice** Find the surface area of each box.

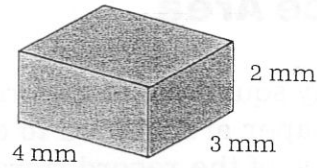
1.



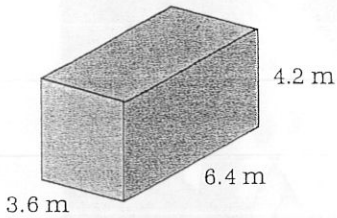
2.



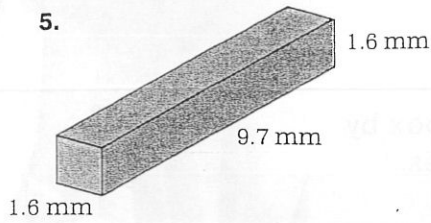
3.



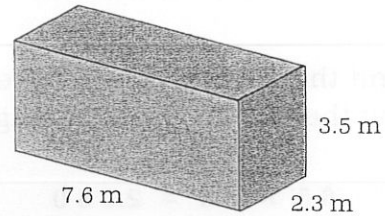
4.



5.

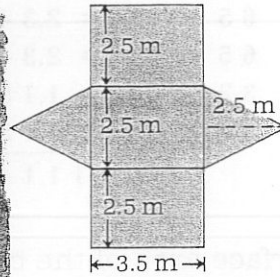



6.



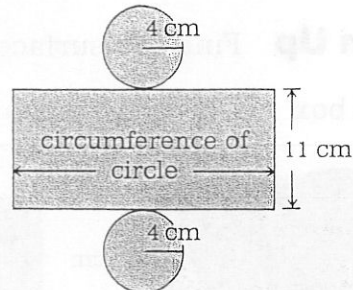

7. Find the surface area of the tent.

The dimensions are shown on the pattern. (Round to the nearest tenth.)



8. Find the surface area of this can.

The dimensions are shown on the pattern. Use 3.14 for  $\pi$ .



**Skillkeeper**

Find the mean of each list of numbers.  
Round to the nearest tenth when necessary.

1. 2, 18, 13, 7

2. 22, 41, 10, 27

3. 67, 48, 53, 61, 70

4. 113, 128, 116, 132

5. 3, 8, 11, 5, 4

6. 17, 38, 51, 26, 28

7. 248, 273, 259, 263, 240

8. 74, 63, 82, 59, 91, 67

9. 298, 47, 93, 966