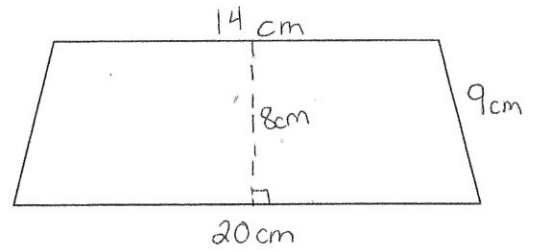
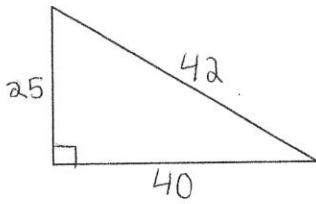


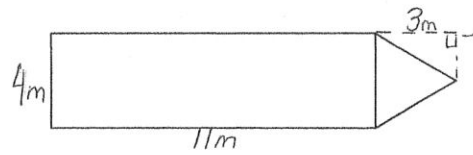
Find the area of triangle XYZ



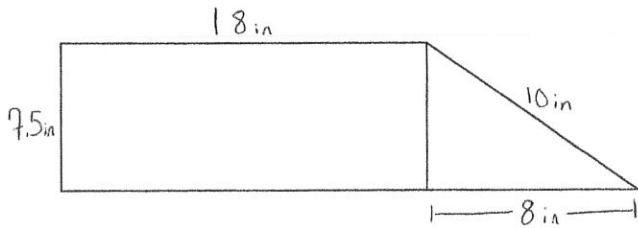
Find the area of the trapezoid



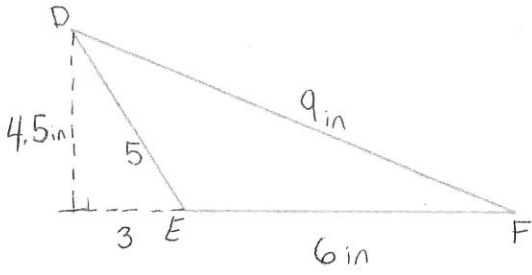
Find the area of the triangle



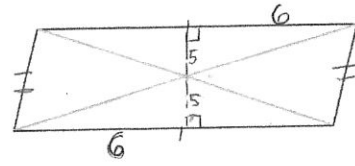
The area of a triangle with a height of 5 is 35 units squared. What is the base of the triangle?



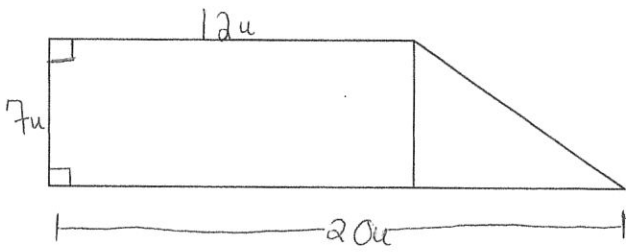
Find the area of the figure



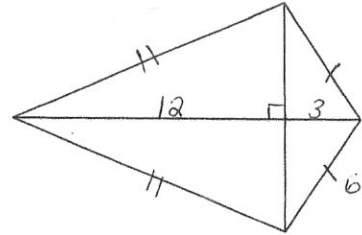
Find the area of the triangle



Find the area of the figure

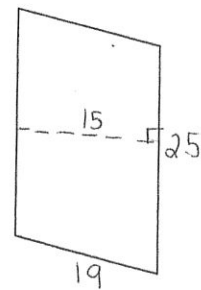


Find the area of the figure



Find the area of the kite

The area of a triangle with a <sup>base of 16</sup> height of 5 is ~~35~~ <sup>48</sup> units squared. What is the <sup>height</sup> ~~base~~ of the triangle?



Find the area of the figure. Name the figure.